



Wie geht es weiter? Wie viele Würfel brauchst du für die beiden nächsten Bauwerke?



2



6




12

4. Bauwerk

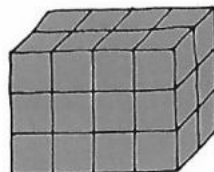
20

5. Bauwerk


30



6



24



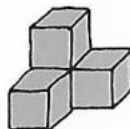
60

4. Bauwerk

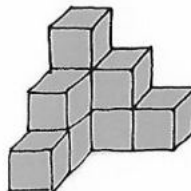
120

5. Bauwerk

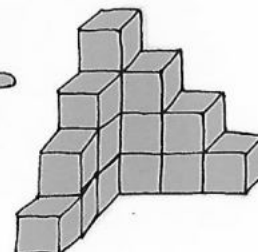
210



4



9



16

4. Bauwerk

25

5. Bauwerk

36