



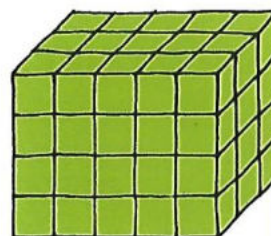

Wie geht es weiter? Wie viele Würfel brauchst du für die beiden nächsten Bauwerke?



4. Bauwerk



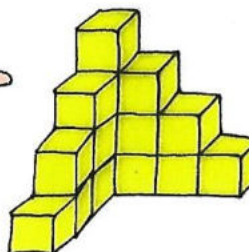
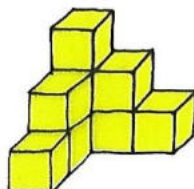
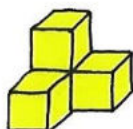
5. Bauwerk



4. Bauwerk



5. Bauwerk



4. Bauwerk



5. Bauwerk

